

WELCOME BACK

TANGY TUESDAY PUZZLE PACK!

Fun brain puzzles that make you smarter!

GRADE
K

PACK 1
tangmath.com

WEEK
1



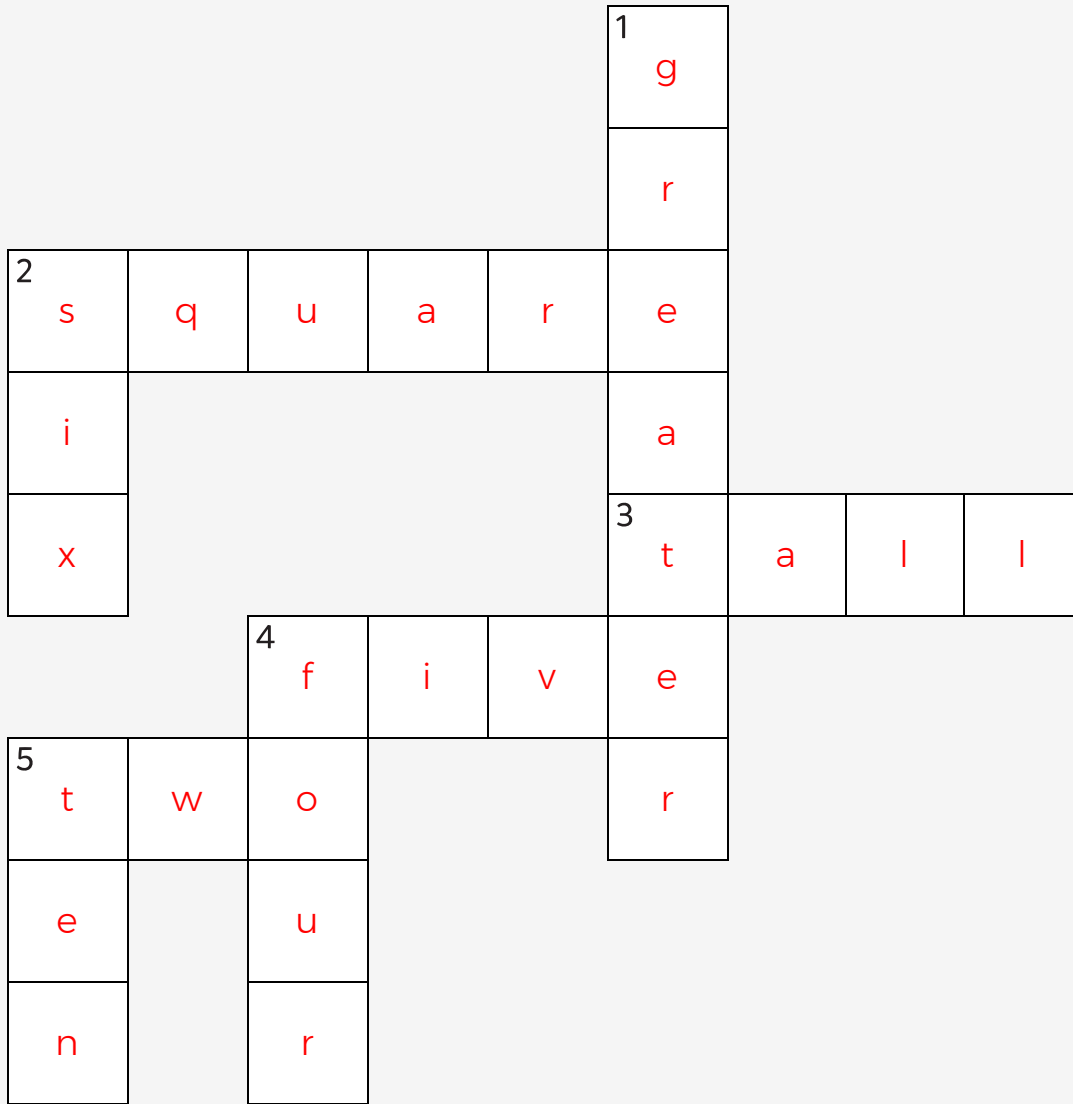
DIGICROSS

TANGY TUESDAY PUZZLE PACK
0.1.1

Name: _____

tangmath.com © 2017-18 Greg Tang

Complete the crossword by filling in a word that fits each clue.



four

greater

ten

tall

square

two

five

six

ACROSS

- a ____ has four sides
- the opposite of short
- 1, 2, 3, 4, ____
- 1 + 1

DOWN

- 5 is ____ than 3
- four plus ____ makes ten
- 1 more than 3
- 10

SNAKE

TANGY TUESDAY PUZZLE PACK
0.1.1

Name: _____

tangmath.com © 2017-18 Greg Tang

Fill in each blank box in order, combining the numbers from the previous two boxes.

2	+1	3			4	-1	3	-1	2	
			+2		+1				+1	
3	-2	5			3			2	-1	3
-2					+1			+1		
1	+2	3	-1	2				3	+1	4

3	-1	2	+1	3	+2	5	-3	2	
									-1

4	+3	1	-3	4	-1	5	+4	1
-1								
3	-1	2	+2	4	+1	5	-2	3



NUMTANGA

TANGY TUESDAY PUZZLE PACK
0.1.1

Name: _____


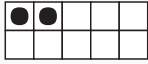
tangmath.com © 2017-18 Greg Tang

In each empty box, write the matching value between adjacent cards.

2	
	nine


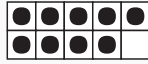
2

0



6	
	twenty

6

7


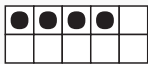
15	
	three

9

10	
	zero



15

10



7	
	fifteen

1



4

20	
	five



5

9	
	eight

8

3	
	four

3

0	
	seven

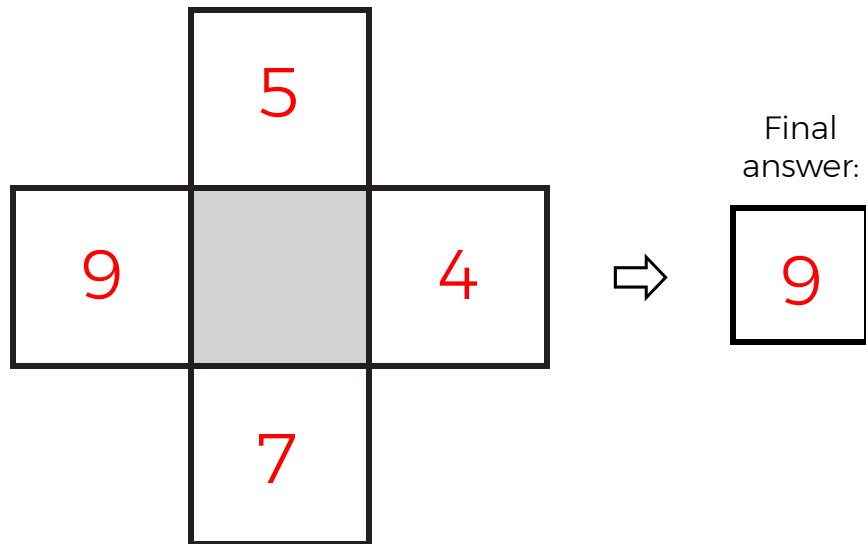
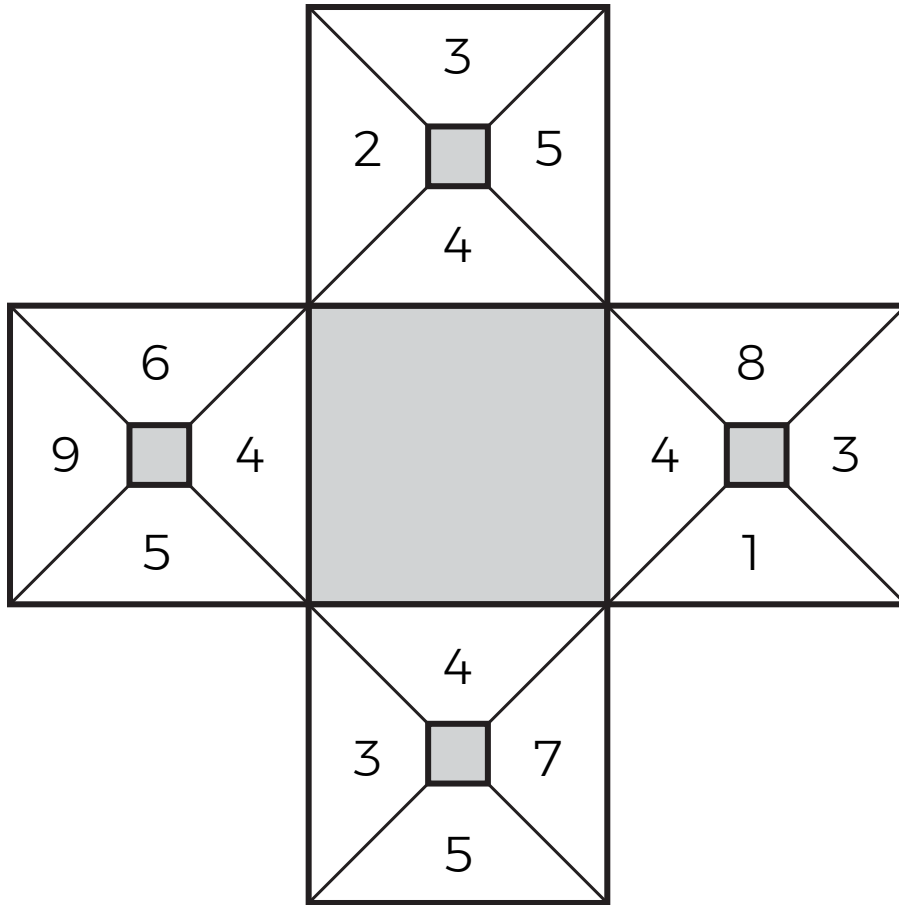
KAKOOMA

TANGY TUESDAY PUZZLE PACK
0.1.1

Name: _____

tangmath.com © 2017-18 Greg Tang

Puzzled? In each 4-number square, find the number that is the sum of 2 other numbers.
Use all 4 sums to create 1 final addition puzzle and solve.



EQUATO

TANGY TUESDAY PUZZLE PACK
0.1.1

Name: _____

tangmath.com © 2017-18 Greg Tang

Fill in the empty boxes to make every horizontal and vertical equation correct.
Read equations left to right and top to bottom. Use every number in the bank once.

1	2	3	4	5
1	=	5	-	4
=		-		=
3	+	2	=	5
-		=		-
2	=	3	-	1